

Nuts about Math game

Please visit [themeasuredmom.com](http://www.themeasuredmom.com) to learn how to use this printable:

<https://www.themeasuredmom.com/free-fall-math-game-for-preschool-kindergarten-nuts-math/>

Thank you for respecting our Terms of Use



The unauthorized reproduction or distribution of a copyrighted work is illegal. Criminal copyright infringement, including infringement without monetary gain, is investigated by the FBI and is punishable by fines and federal imprisonment.

- **YOU MAY** use this file for your own personal, non-commercial use.
- **YOU MAY** print as many copies as you'd like to use in your classroom, home, public library, or tutoring setting.
- **YOU MAY** download this file by visiting <https://www.themeasuredmom.com>.
- **YOU MAY** save this file on your computer.
- **YOU MAY** share the link to the web page where the printable can be found.
- **YOU MAY NOT** link directly to the pdf file. Instead, link to the web page where it can be downloaded.
- **YOU MAY NOT** alter this file or claim this file as your own.
- **YOU MAY NOT** sell or in any way profit from this file. It is also illegal to print this file and sell the printed copy.
- **YOU MAY NOT** use this or any other printable from The Measured Mom on Outschoool.
- **YOU MAY NOT** e-mail this file OR store it on any location where others can download it (Amazon Inspire, Dropbox, Facebook groups and forums, etc.). If you would like to use this file for distance learning, please contact us directly for permission at <https://www.themeasuredmom.com/contact/>.

Check out these resources from the shop!

ALPHABET CURRICULUM FOR PRESCHOOL

LETTERS, SOUNDS & PHONEMIC AWARENESS!

Memory game
Letter j - Day 1
Does it begin with j?
a e t
a B C
the measured mom

Preschool Math Curriculum

SIMPLE ACTIVITIES FOR HOME

0 1 2
2 3
the measured mom

SEASONAL COUNTING MATS #1-20

HANDS-ON PRESCHOOL LEARNING

3 5
the measured mom

A-Z LETTER & PHOTO CARDS

WITH REAL PHOTOS

B b O o b
Qq Rr Mm Uu
Ss Tt Vv
quill rabbit mittens umbrella books turtle vegetables

ALPHABET GAMES & ACTIVITIES

INCLUDES EDITABLE GAMES

Name the Letter
BINGO
Aa Bb Cc
My ABC Book
the measured mom

Get my book!



Reach All Readers

Using the Science of Reading
to Transform Your
Literacy Instruction

Anna Geiger

FOREWORD BY DR. STEPHANIE STOLLAR

JOSSEY-BASS
A Cengage Brand

<https://themeasuredmom.lpages.co/reach-all-readers/>

Find me here

Blog: <https://www.themeasuredmom.com/>

Membership: <https://membership.themeasuredmom.com/>

Podcast: <https://www.themeasuredmom.com/triplerteachingpodcast/>

Facebook: <https://www.facebook.com/themeasuredmom/>

Pinterest: <https://www.pinterest.com/themeasuredmom/>

Instagram: <https://www.instagram.com/themeasuredmom/>

Contact: <https://www.themeasuredmom.com/contact/>

Printing trouble?


If the file is printing strangely (usually with extra black boxes), please download the free Adobe Reader to your computer. Open and print using that program. 99% of the time, this solves it!

You can get it here: <https://get.adobe.com/reader/>



You're invited to join The Measured Mom Plus!

- our membership site for Pre-K to 3rd grade educators -



Save hours of time with our one-click printable library. You'll get access to thousands of resources for Pre-K through third grade!

Learn more about the science of reading with our recorded webinars and simple science of reading roadmaps. You can watch them 24/7!


Get hundreds of no-print resources for free, and save 50% in the member shop.

Get access to The Literacy Circle, our safe and supportive community exclusively for members.

[LEARN MORE](#)



Which one is different?



+1

© 2013 themeasuredmom.com


You had 8 walnuts. You can't find two of them! Now how many do you have?



+3

© 2013 themeasuredmom.com


Point to the row which shows squirrels from smallest to largest.



+2

© 2013 themeasuredmom.com

How many peanuts are there?



+2

© 2013 themeasuredmom.com

Nuts about
Math!



Nuts about
Math!



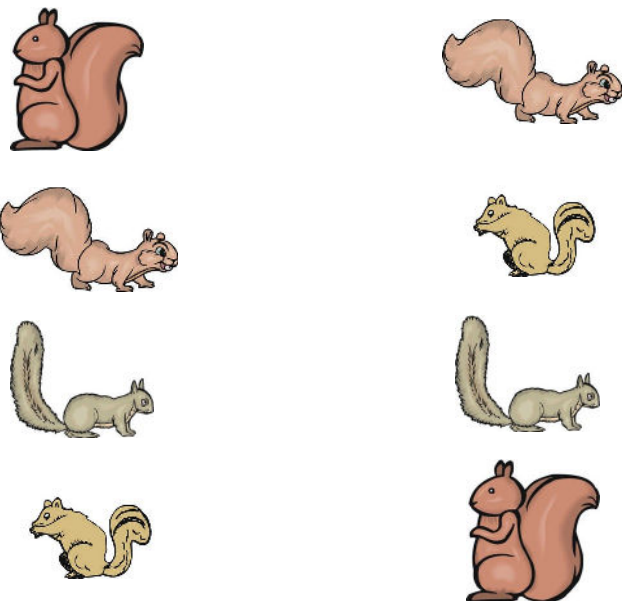
Nuts about
Math!



Nuts about
Math!




Draw lines with your finger to match the squirrels.



+1

© 2013 themeasuredmom.com

Which die shows the number of nuts?



+2

© 2013 themeasuredmom.com

What comes next, brown or green?



+1

© 2013 themeasuredmom.com

You had four peanuts. You find four more. Now how many do you have?



+3

© 2013 themeasuredmom.com

Nuts about
Math!



Nuts about
Math!




Nuts about
Math!



Nuts about
Math!



Which squirrel is the biggest?



+1

© 2013 themeasuredmom.com

Which nut is the smallest?



+1

© 2013 themeasuredmom.com

Point to the number which shows how many nuts.




1 2 3

+1

© 2013 themeasuredmom.com

Point to the number which shows how many squirrels.



3 4 5

+1

© 2013 themeasuredmom.com

Nuts about
Math!



Nuts about
Math!



Nuts about
Math!



Nuts about
Math!



Which color squirrel comes next?



+1

© 2013 themeasuredmom.com

Count the nuts.




+2

You have 3 nuts in the maple tree, 3 nuts under a bush, and 3 nuts in the ground. How many do you have in all?



+3

How many more nuts will it take to make 10?



$$+ ? = 10$$

+3

Nuts about
Math!



Nuts about
Math!



Nuts about
Math!



Nuts about
Math!



If there are two nuts in each shell, how many nuts are there in three shells?



+3

© 2013 themeasuredmom.com


If two squirrels want to share these acorns, how many will each of them get?



+3

© 2013 themeasuredmom.com

Your favorite nut is not the biggest. It is not brown. Which one is it?



+3

© 2013 themeasuredmom.com

You are having 5 friends over. You will give each of them 2 nuts. How many nuts do you need?



+3

© 2013 themeasuredmom.com

Nuts about
Math!



Nuts about
Math!



Nuts about
Math!



Nuts about
Math!



You have 5 nuts. If you eat 1, how many will you have left?



+2

© 2013 themeasuredmom.com


You have 1 peanut. A girl gives you 1 more. Now how many do you have?



+2

© 2013 themeasuredmom.com


Which die shows how many squirrels there are?



+2

© 2013 themeasuredmom.com

Each squirrel wants 1 nut. How many nuts do you need?



+2

© 2013 themeasuredmom.com

Nuts about
Math!



Nuts about
Math!



Nuts about
Math!



Nuts about
Math!



If you want to share half the nuts, how many will you give away?



+3

© 2013 themeasuredmom.com

Point to the different squirrel in each row.



+2

© 2013 themeasuredmom.com

This squirrel is hiding his acorns! He has more than 5, but fewer than 7. How many acorns does he have?



+3

This squirrel wants you to share your walnuts. If you give him 1, how many will you have left?



+2

© 2013 themeasuredmom.com

Nuts about
Math!



Nuts about
Math!







Nuts about
Math!



Nuts about
Math!



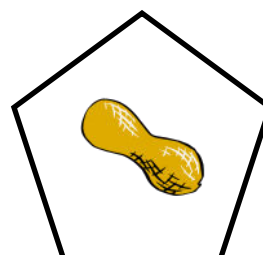
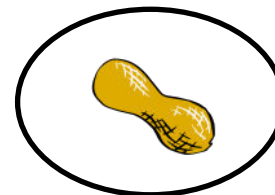
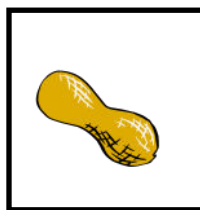
Point to the squirrel on the diamond.



+1

© 2013 themeasuredmom.com

Point to the peanut on the square.



+1

© 2013 themeasuredmom.com

Nuts about
Math!



Nuts about
Math!

