

Thank you for checking out this product preview!

INTRODUCTION TO DIVISION

INCLUDES BOTH DIGITAL AND PRINT OPTIONS

1 There are 8 bones. Divide them equally among the 4 dogs. How many bones will be each dog get?

8 ÷ 4 = □

Total number of bones Number of dogs Number of bones for each dog

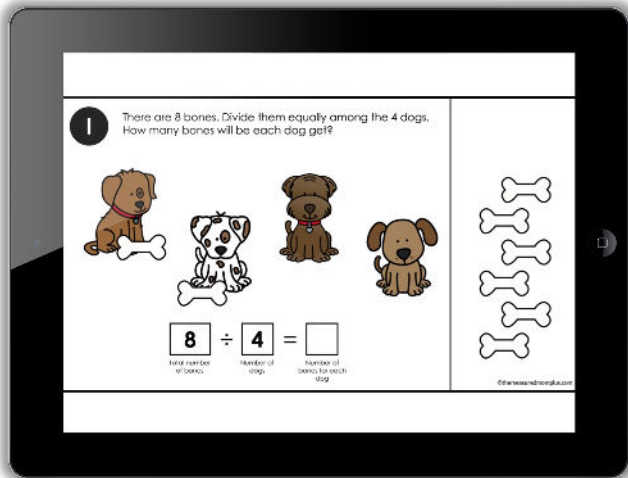
©TheMeasuredMom.com



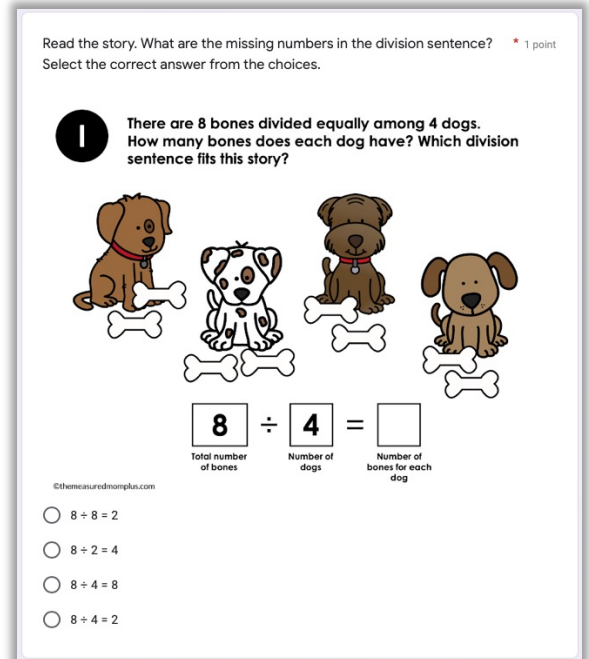
PRINT THE TASK CARDS OR USE THE DIGITAL RESOURCE WITH SEESAW, GOOGLE SLIDES, OR GOOGLE FORMS

This product from The Measured Mom® comes in four different versions.


When you purchase, you have the option of using the Google Slides activity, the Seesaw activity, the Google Forms (in a quiz format), or the printable task cards. The file includes specific instructions for using the digital versions. *The same questions are in all four versions.*



**Google Slides activity (20 slides)
or Seesaw activity
(19 slides)**



**Google Forms quiz
(20 questions)**



**Printable task cards in both
color and black & white
(20 cards)**