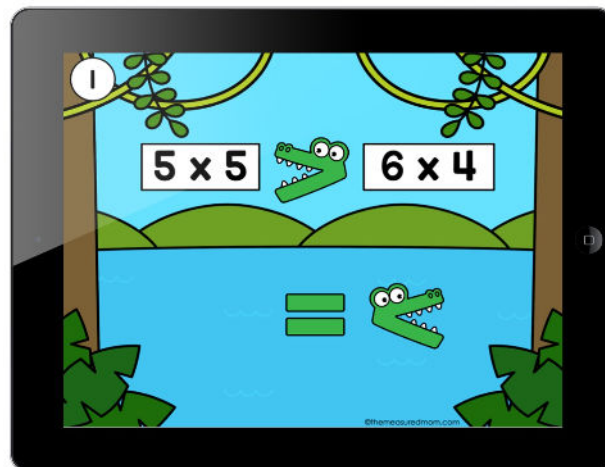


Thank you for checking out this product preview!

COMPARING MULTIPLICATION FACTS

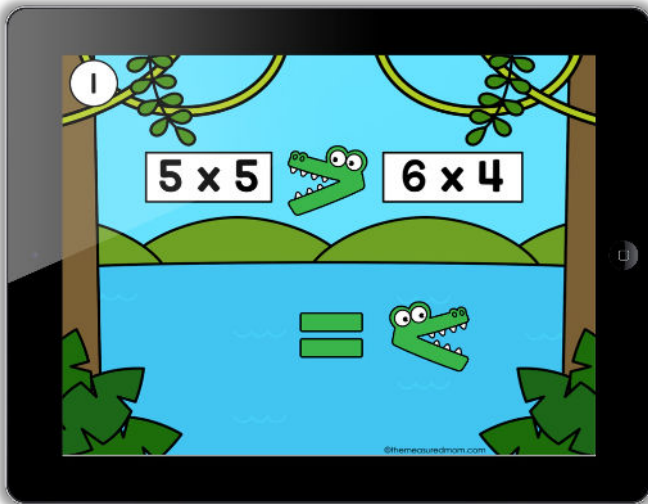
INCLUDES BOTH DIGITAL AND PRINT OPTIONS



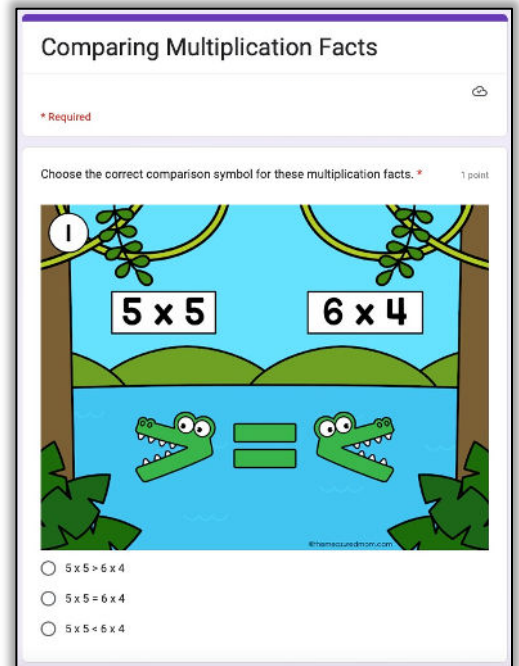
PRINT THE WORKSHEET OR USE THE DIGITAL RESOURCE
WITH SEESAW, GOOGLE SLIDES, OR GOOGLE FORMS

This product from The Measured Mom® comes in four different versions.

When you purchase, you have the option of using the Google Slides task cards, the Seesaw activity, Google Forms task cards (in a quiz format), or the printable worksheet. The file includes specific instructions for using the digital versions. *The same questions are in all four versions.*



Google Slides (24 slides) or Seesaw activity (19 slides)



Google Forms quiz (24 questions)

Comparing Multiplication Facts		
Determine the product of each multiplication fact. Draw the comparison symbol in the circle between them. (>, =, <) Name _____		
1 $5 \times 5 \bigcirc 6 \times 4$	2 $2 \times 3 \bigcirc 0 \times 7$	3 $6 \times 3 \bigcirc 5 \times 4$
4 $8 \times 4 \bigcirc 7 \times 3$	5 $4 \times 6 \bigcirc 8 \times 3$	6 $9 \times 2 \bigcirc 6 \times 3$
7 $7 \times 7 \bigcirc 6 \times 9$	8 $3 \times 5 \bigcirc 8 \times 2$	9 $6 \times 7 \bigcirc 5 \times 9$
10 $1 \times 8 \bigcirc 2 \times 4$	11 $9 \times 4 \bigcirc 6 \times 6$	12 $6 \times 5 \bigcirc 7 \times 4$
13 $4 \times 8 \bigcirc 9 \times 3$	14 $9 \times 9 \bigcirc 8 \times 8$	15 $5 \times 7 \bigcirc 6 \times 6$
16 $3 \times 4 \bigcirc 5 \times 2$	17 $9 \times 0 \bigcirc 0 \times 1$	18 $7 \times 8 \bigcirc 9 \times 6$
19 $3 \times 3 \bigcirc 2 \times 6$	20 $1 \times 3 \bigcirc 2 \times 2$	21 $7 \times 2 \bigcirc 4 \times 4$
22 $6 \times 8 \bigcirc 9 \times 7$	23 $9 \times 8 \bigcirc 10 \times 7$	24 $5 \times 8 \bigcirc 6 \times 7$

Printable worksheet